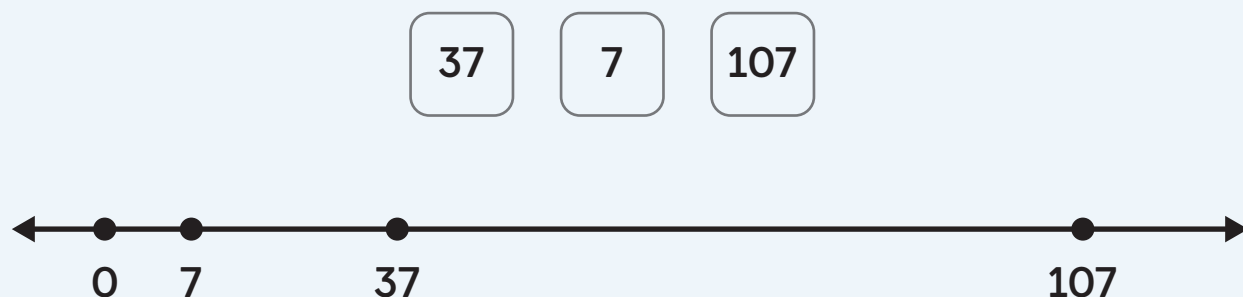


Summary 5.13

You can use place value and open numbers lines to order numbers.



open number line A representation that can be used to show numbers in order.

Practice 5.13

Choose from these Centers.



Get Your Numbers
in Order

Two-digit Numbers



Greatest
of Them All

Two-digit Numbers

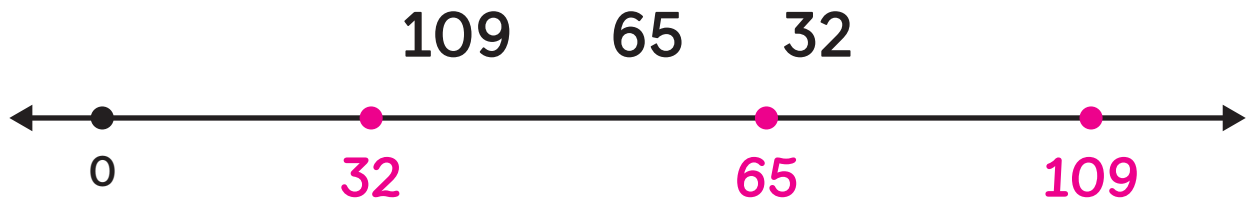


Mystery Number

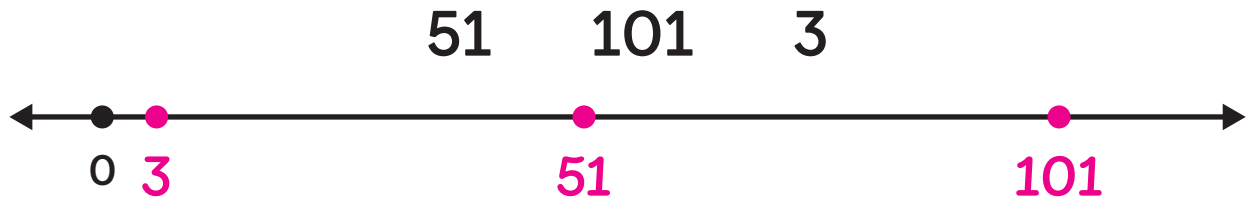
Two-digit Numbers

For Problems 1-3, put the numbers in order by marking them with a point on the open number line.

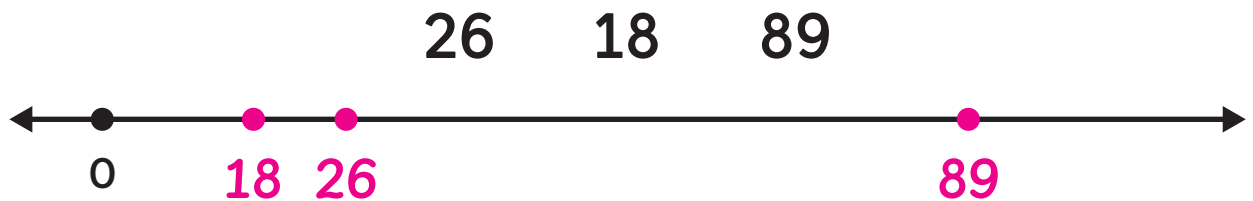
1



2



3




Spiral Review

For Problems 4 and 5, circle the object that can hold more water.

4



5



6 Circle 4 equations that show equal values on both sides.

$$10 + 3 + 4 = 17$$

$$7 + 3 = 10 + 3$$

$$8 + 8 = 10 + 6$$

$$12 - 2 = 6 + 4$$

$$8 + 2 = 9 + 0$$

$$10 + 6 = 10 + 3 + 3$$