
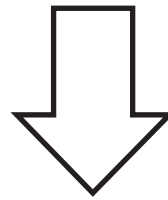


Additional Practice**4.11**

- 1** There were 6 people playing soccer.
2 people stopped playing to rest.
How many people are playing soccer now?



more than 6



less than 6

**Show your thinking.****2**

There are _____ playing soccer.

Directions

- 1** Predict whether the answer will be more or less than 6. Circle to show your answer.
- 2** Solve the story problem and show your thinking using objects, drawings, numbers, or words. Write your answer on the line.

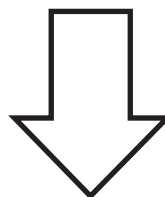
3 Priya had 6 toy cars on the mat.

She put 3 more toy cars on the mat.

How many toy cars does Priya have on the mat now?



more than 8



less than 8

i Show your thinking.

4

Priya has _____ toy cars on the mat.

Directions

- 3** Predict whether the answer will be more or less than 8. Circle to show your answer.
- 4** Solve the story problem and show your thinking using objects, drawings, numbers, or words. Write your answer on the line.