
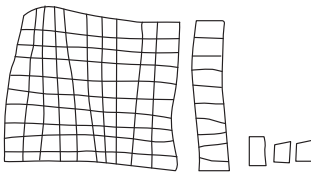


Name \_\_\_\_\_ Date \_\_\_\_\_

# How Many?

Use with Activities 1 and 2.

Representing 113			
		$100+10+13$	<b>113</b>
building	drawing	expanded form	standard form

I used the digits in the three-digit number . . .




The one on the left/right means . . .

The one in the middle means . . .

They show the same amount because . . .

each representation has . . .

there are \_\_\_\_\_ hundreds/tens/ones . . .

Three-digit numbers		
		
hundreds	tens	ones

Word bank	
English	Español
digit	dígito
equation	ecuación
neighbor	vecino
represent	representar